
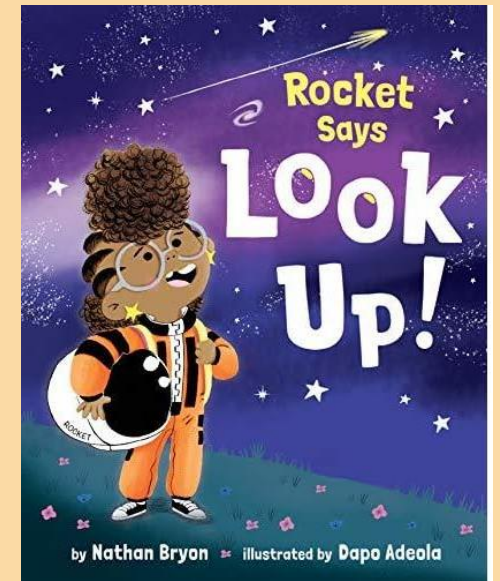


Dahl Class - 2K



Year 2's learning for today!


Friday 12th January 2024



Bryon Class - 2H



Hello Year 2!
How are you
today?



What could Year 2 do today?

writing

reading/phonics

handwriting

maths

art

writing

LO: To know features of a book.

Continue with your book making from yesterday.
Use this checklist to see how many things you have included in your book.

- Front cover
- Title
- Author's name (you)
- Birthday of the book (date)
- Illustrations
- Sentences with capital letters and punctuation (, ?, !)
- Accurate spellings

reading/phonics

Please practise reading the sounds and high frequency words in your reading record. We'd also love for you to practise reading your schoolbook as many times as you like. Each time see if you can be more fluent and expressive as this is something many of you are working on.

If you would like something else to read, then choose a book from home or sign up here free for some more reading material.

<https://www.oxfordowl.co.uk/for-home/>

handwriting

LO: To join letters

Days of the Week Handwriting Practice

Monday

Tuesday

Wednesday

Thursday

Friday

Monday

Tuesday

Wednesday

Thursday

Friday

Practise writing
the days of the
week.

Please keep up with your Maths fluency.

Practise using 'hit the button' and '1 min maths'.

maths

L.O: To calculate with money.

Carry on playing shops like yesterday.


Please also practise calculating with money, following on from your shopping game yesterday.

The maths sheets can either be printed out and completed or you can just record the answers on paper.

Addition with Money

Find the total cost of the items below. Use the space to show your working.

1.



=



=



Total price = _____

L.O: To calculate with money.

2.



=



=



=



Total price = _____

Addition with Money

Find the total cost of the items below. You will find the price of each item from the Grocery Store Price List. Use the space to show your working.

Grocery Store Price List:

apple 50p

box of Peaches £2

eggs £2.50

banana 40p

pack of Tomatoes 90p

spaghetti £2.30

carrot 50p

milk £2.80

pepper 60P

pineapple £1.50

cheese £2.90

rice £3.60

pack of strawberries 80p

chocolate £3.10

Addition with Money

Find the total cost of the items below. You will find the price of each item from the Grocery Store Price List. Use the space to show your working.

Grocery Store Price List:

apple 50p	box of Peaches £2	eggs £2.50
banana 40p	pack of Tomatoes 90p	spaghetti £2.30
carrot 50p	milk £2.80	pepper 60P
pineapple £1.50	cheese £2.90	rice £3.60
pack of strawberries 80p	chocolate £3.10	

7.



Total price = _____

Addition with Money

Find the total cost of the items below. You will find the price of each item from the Grocery Store Price List. Use the space to show your working.

Grocery Store Price List:

apple 50p	box of Peaches £2	eggs £2.50
banana 40p	pack of Tomatoes 90p	spaghetti £2.30
carrot 50p	milk £2.80	pepper 60P
pineapple £1.50	cheese £2.90	rice £3.60
pack of strawberries 80p	chocolate £3.10	

8.



Total price = _____

art

LO: To create a sculpture.

Here are some examples...


Can you design and make your own sculpture out of natural and man-made materials?

i.e. sticks, wool and playdough?

Take a photo and share it to our year 2 email ready for us to display at school.
Here are some examples...







Have you got any questions
about today?



Who?



What?



How?




When?



Where?



Why?



Well done Year
2!



See you this afternoon!

